

SKILL 1: Integers on the Number Line

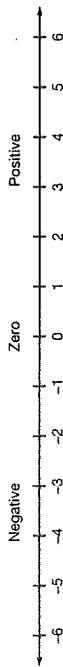
Student pages 1-2

Name _____ Date _____ Class _____



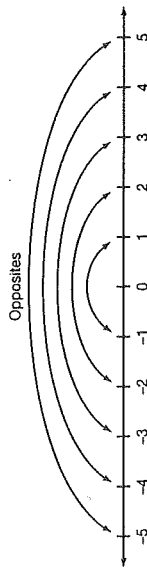
SKILL 1: Integers on the Number Line

A positive number is a number that is greater than 0. The positive numbers 1, 2, 3, and so on, are shown to the right of 0 on the number line. They may be written with or without a "+" symbol. A negative number is a number that is less than 0. Negative numbers must be written with a "-" symbol before the numeral. The negative numbers -1, -2, -3, and so on, are shown to the left of 0 on the number line.



The negative number -3 is read *negative 3*; -4 is read *negative 4*, and so on. The number 0 is neither positive nor negative. The number 0, the positive whole numbers (1, 2, 3, ...), and the corresponding negative numbers (-1, -2, -3, ...) are **integers**.

Two integers on opposite sides of 0 but the same distance from 0 are called **opposites**. For example, the opposite of -9 is 9, and the opposite of 6 is -6. The number 0 is its own opposite.



Integers are used for describing gains and losses, temperatures above and below 0°, and many other quantities that are "opposites."

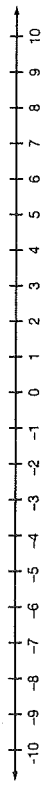
Guided Practice

- The number -7 is to the left of 0 on the number line, so -7 is a negative number.
- The opposite of -7 is the number 7 units to the right of 0. So, the opposite of -7 is 7.

Name _____ Date _____ Class _____

SKILL 1: Practice

Think about where each integer is located on the number line. Tell whether the integer is positive, negative, or neither.



- 6 negative
- 10 negative
- 50 positive
- 8 positive
- 37 negative
- 100 negative
- 9 positive
- 43 positive
- 250 positive
- 21 negative
- 0 neither
- 1,000 positive

Write the opposite of each integer.

- 18 -18
- 0 0
- 160 -160
- 25 25
- 48 48
- 83 83
- 16 16
- 2 2
- 76 76
- 5 5
- 11 -11
- 125 125

Write the integer that best describes each situation.

- 35 ft below sea level -35
- 78°F above zero 78
- A gain of \$60 60
- A debt of \$20 -20
- 8-yard loss -8
- \$80 profit 80
- 3 seconds before lift-off -3
- 7 steps backward -7



- Which integer is the opposite of -12?
 - A -21
 - B -12
 - C 12
 - D 21

Skill 1

- Which integer is neither positive nor negative?
 - F -1
 - G 0
 - H 1
 - J 10

Skill 1

SKILL 2: Absolute Value

Name _____ Date _____ Class _____



SKILL 2: Absolute Value

The absolute value of a number is its distance from 0 on the number line.



The symbol for absolute value is $| |$. Since -5 is 5 units from 0, the absolute value of -5 is 5. In symbols, $|-5| = 5$. The distance from 0 to 3 is 3 units, so $|3| = 3$.

An integer and its opposite are the same distance from 0 on the number line. This means that a number and its opposite always have the same absolute value. For example, $|-5| = 5$ and $|5| = 5$.

Example 1

Find $|-2|$.

On the number line, -2 is 2 units from 0. So $|-2| = 2$.

Example 2

Name the two integers that have an absolute value of 8.

Start at 0 on the number line and count 8 units to the left. You arrive at -8 , so $|-8| = 8$.

Start at 0 on the number line and count 8 units to the right. You arrive at 8, so $|8| = 8$.

The two integers with an absolute value of 8 are -8 and 8.

Guided Practice

Find each absolute value. Refer to the number line if you need help.

1. $|-7|$

-7 is 7 units from 0.

So $|-7| = \underline{7}$.

2. $|6|$

6 is 6 units from 0.

So $|6| = \underline{6}$.

Use a number line to complete the sentences.

3. Start at 0 and go 4 units to the left. You arrive at -4. So $|-4| = \underline{4}$.

4. Start at 0 and go 4 units to the right. You arrive at 4. So $|4| = \underline{4}$.

5. The two integers with an absolute value of 4 are -4 and 4.



32. Find $|-11|$.

A -11

C 1

B -1

D 11

Skill 2

33. What is the opposite of -36 ?

F 63

H 0

G 36

J -63

Skill 1

Name _____

Date _____

Class _____

SKILL 2: Practice

Find each absolute value.

1. $|10| = \underline{10}$

3. $|-13| = \underline{13}$

2. $|-29| = \underline{29}$

6. $|-56| = \underline{56}$

4. $|92| = \underline{92}$

9. $|-400| = \underline{400}$

7. $|0| = \underline{0}$

12. $|-47| = \underline{47}$

8. $|80| = \underline{80}$

15. $|74| = \underline{74}$

10. $|21| = \underline{21}$

18. $|-74| = \underline{74}$

11. $|-48| = \underline{48}$

20. 3 -3 and 3

13. $|42| = \underline{42}$

22. 19 -19 and 19

14. $|-31| = \underline{31}$

24. 100 -100 and 100

16. $|17| = \underline{17}$

26. 53 -53 and 53

17. $|-17| = \underline{17}$

28. 400 -400 and 400

19. 14 -14 and 14

30. 37 -37 and 37

21. 32 -32 and 32

33. What is the opposite of -36 ?

23. 20 -20 and 20

33. What is the opposite of -36 ?

25. 45 -45 and 45

33. What is the opposite of -36 ?

27. 96 -96 and 96

33. What is the opposite of -36 ?

29. 84 -84 and 84

33. What is the opposite of -36 ?

Solve.

31. Elevations above sea level are represented by positive numbers. Elevations below sea level are represented by negative numbers. What two elevations have an absolute value of 1,000 ft? -1,000 and 1,000

SKILL 3: Comparing and Ordering Integers

Student pages 5-6

Name _____ Date _____ Class _____

SKILL 3: Comparing and Ordering Integers

You can use the number line to help compare two integers. Integers become greater as you move to the right.

On the number line above, 3 is to the right of -4, so 3 is greater than -4. The symbols $>$, $<$, and $=$ are used to compare integers. Since 3 is greater than -4, you can write $3 > -4$, or $-4 < 3$.

To order a set of integers from least to greatest, locate them on the number line. Then list them in order from left to right.

Example 1

Use $>$, $<$, or $=$ to compare the numbers.

a. $-1 \bigcirc -5$
 -1 is to the right of -5 .
 So $-1 > -5$.

b. $-6 \bigcirc -2$
 -6 is to the left of -2 .
 So $-6 < -2$.

Example 2

Order the integers 2, -3, 5, and -1 from least to greatest.

Locate the integers on the number line.

List the integers from left to right. From least to greatest the integers are -3, -1, 2, and 5.

Guided Practice

Use $>$, $<$, or $=$ to compare the numbers. Refer to the number line.

1. $-6 \bigcirc -1$ 2. $5 \bigcirc -5$ 3. $|-4| \bigcirc 2$

4. List the integers -3, -6, and 4 from least to greatest. -6, -3, 4

Name _____ Date _____ Class _____

SKILL 3: Practice

Use $>$, $<$, or $=$ to compare the numbers.

1. $-6 \bigcirc -5$ 2. $1 \bigcirc -4$ 3. $12 \bigcirc -20$

4. $9 \bigcirc 15$ 5. $-8 \bigcirc -12$ 6. $-30 \bigcirc 0$

7. $-20 \bigcirc 13$ 8. $-16 \bigcirc 16$ 9. $18 \bigcirc |-18|$

10. $40 \bigcirc -100$ 11. $-50 \bigcirc 45$ 12. $6 \bigcirc -36$

13. $0 \bigcirc -32$ 14. $|7| \bigcirc 7$ 15. $|-3| \bigcirc |-8|$

16. $|17| \bigcirc 17$ 17. $|-17| \bigcirc 17$ 18. $-74 \bigcirc 60$

Order each set of integers from least to greatest.

19. -9, 4, 0 -9, 0, 4 20. -7, -8, -4 -8, -7, -4

21. -3, 2, 6, -10 -10, -3, 2, 6 22. 10, -20, 30, -30 -30, -20, 10, 30

23. -5, 17, -19, 6 -19, -5, 6, 17 24. 3, -3, 10, -10 -10, -3, 3, 10

Solve.

25. The low temperature on Monday was 5°F , the low temperature on Tuesday was -5°F , and the low temperature on Wednesday was -1°F . On which day did the lowest temperature occur? Tuesday

26. Which list shows the integers -3, -4, and 2 in order from least to greatest? Skill 3

Skill 2

A) -4, -3, 2 C) 2, -3, -4 F -28 H) 28

B) -3, -4, 2 D) 2, -4, -3 G 0 J 56

27. Find $|28|$.

SKILL 4: Addition of Integers

Name _____

Date _____

Class _____

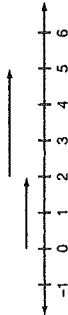


SKILL 4: Addition of Integers

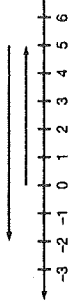
You can think of adding integers as making moves on a number line.

Example 1

- a. Use the number line to find $2 + 3$. b. Use the number line to find $5 + (-7)$.



Start at 0. Move 2 units to the right. Then move 3 more units to the right. So, $2 + 3 = 5$.



Start at 0. Move 5 units to the right. Then move 7 units to the left. So, $5 + (-7) = -2$.

You can also add integers without the number line.

To add **two integers with the same sign**: Add the absolute values of the numbers. The sum has the same sign as the addends.

To add **integers with different signs**: Find their absolute values. The sum is in the direction of the number with the larger absolute value. Subtract the smaller absolute value from the larger to find out how far the sum is in that direction.

Example 2

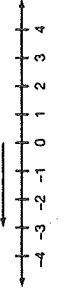
- a. Find $-4 + (-6)$, and $|-6| = 6$.
 $|-4| = 4$, and $|-6| = 6$.

Both numbers are negative. Add the absolute values, 4 and 6, to get 10. Use the negative sign. So, $-4 + (-6) = -10$.

b. Find $7 + (-9)$.
 $|-7| = 7$, and $|-9| = 9$.
 The numbers have different signs. Subtract the smaller absolute value, 7, from 9 to obtain 2. The number -9 has a larger absolute value than the number 7, so the answer is negative. So, $7 + (-9) = -2$.

Guided Practice

1. Use the number line to find $-3 + 6$.



Start at 0. Move 3 units to the left. Then move 6 units to the right. So, $-3 + 6 = 3$.

2. Find $-4 + 7$.

The numbers have different signs. Subtract the smaller absolute value from the larger to get 3. Since 7 has a larger absolute value than -4 , the sign of the answer is positive. So, $-4 + 7 = 3$.

Name _____

Date _____

Class _____

SKILL 4: Practice

Use the number line to find each sum.



1. $-2 + 7 = 5$ 2. $3 + (-5) = -2$ 3. $5 + 3 = 8$
 4. $7 + (-8) = -1$ 5. $8 + (-8) = 0$ 6. $-3 + (-2) = -5$
 7. $-4 + 9 = 5$ 8. $2 + (-9) = -7$ 9. $3 + (-1) = 2$
 10. $-6 + (-2) = -8$ 11. $4 + 5 = 9$ 12. $-8 + 5 = -3$
 13. $7 + 3 = 10$ 14. $-3 + 2 = -1$ 15. $5 + (-4) = 1$

Add the integers.

16. $-7 + 12 = 5$ 17. $35 + (-1) = 34$ 18. $-10 + (-12) = -22$
 19. $-6 + (-5) = -11$ 20. $0 + (-6) = -6$ 21. $50 + (-2) = 48$
 22. $1 + (-7) = -6$ 23. $15 + (-15) = 0$ 24. $2 + (-9) = -7$
 25. $-31 + 3 = -28$ 26. $4 + (-12) = -8$ 27. $-23 + 8 = -15$
 28. $10 + (-15) = -5$ 29. $42 + 16 = 58$ 30. $-1 + (-4) = -5$

Solve.

31. The temperature in Middlefield at 6 A.M. was -15°F . By 3 P.M., the temperature had risen 19°F . What was the temperature at 3 P.M.?
 _____ 4°F

32. A diver was 7 m below the surface of the water. The diver then descended 3 m. What integer represents the diver's position after the descent?
 _____ -10



33. Find $-12 + 8$.

- A -20 C 4
 B -4 D 20

Skill 4

34. Which number is less than -12 ?
 Skill 3

- E -14 H -3
 G -11 J 4

SKILL 6: Multiplication of Integers

Name _____

Date _____

Class _____



SKILL 6: Multiplication of Integers

Study the patterns below for multiplying integers.

(Note that the raised dot can be used instead of \times to show multiplication.)

- $3 \cdot 2 = 6$
- $3 \cdot 1 = 3$
- $3 \cdot 0 = 0$
- $3 \cdot (-1) = -3$
- $3 \cdot (-2) = -6$
- $-4 \cdot 2 = -8$
- $-4 \cdot 1 = -4$
- $-4 \cdot 0 = 0$
- $-4 \cdot (-1) = 4$
- $-4 \cdot (-2) = 8$

Note that a positive integer multiplied by a positive integer is positive; a positive integer multiplied by a negative integer is negative.

Note that a negative integer multiplied by a positive integer is negative; a negative integer multiplied by a negative integer is positive.

The product of two numbers with the same sign is positive.
The product of two numbers with different signs is negative.
The product of 0 and any number is 0.

Example

Multiply.

- a. $-3 \cdot (-6) = 18$ Both integers are negative, so the product is positive.
- b. $-5 \cdot 7 = -35$ The integers have different signs, so the product is negative.
- c. $8 \cdot (-4) = -32$ The integers have different signs, so the product is negative.
- d. $0 \cdot (-9) = 0$ One of the integers is 0, so the product is zero.

Guided Practice

Tell whether the product is positive, negative, or 0. Then multiply.

- 1. $2 \cdot (7)$
The integers have the same sign.
The product is positive.
So, $2 \cdot (7) = 14$.
- 2. $5 \cdot (-6)$
The integers have different signs.
The product is negative.
So, $5 \cdot (-6) = -30$.
- 3. $-21 \cdot 0$
The second integer is 0.
The product is 0.
So, $-21 \cdot 0 = 0$.
- 4. $(-10) \cdot (-7)$
The integers have the same sign.
The product is positive.
So, $(-10) \cdot (-7) = 70$.

Name _____

Date _____

Class _____

SKILL 6: Practice

Tell whether the product is positive, negative, or 0. Then multiply.

- 1. $-2 \cdot 10$ negative
- 2. $-8 \cdot (-9)$ positive
- 3. $7 \cdot 15$ positive
- 4. $0 \cdot (-23)$ 0
- 5. $-42 \cdot 3$ negative
- 6. $-12 \cdot (-15)$ positive
- 7. $-2 \cdot 4 = -8$
- 8. $-5 \cdot 6 = -30$
- 9. $4 \cdot (-5) = -20$
- 10. $-1 \cdot (-13) = 13$
- 11. $2 \cdot (-8) = -16$
- 12. $5 \cdot 19 = 95$
- 13. $-3 \cdot (-6) = 18$
- 14. $7 \cdot (-4) = -28$
- 15. $-8 \cdot 11 = -88$
- 16. $-6 \cdot 20 = -120$
- 17. $-3 \cdot (-12) = 36$
- 18. $-4 \cdot 5 = -20$
- 19. $-7 \cdot 7 = -49$
- 20. $6 \cdot (-10) = -60$
- 21. $-8 \cdot (-15) = 120$
- 22. $-20 \cdot (-5) = 100$
- 23. $8 \cdot (-30) = -240$
- 24. $-20 \cdot 20 = -400$
- 25. $-7 \cdot (-13) = 91$
- 26. $14 \cdot (-5) = -70$
- 27. $25 \cdot 3 = 75$
- 28. $9 \cdot (-30) = -270$
- 29. $-20 \cdot (-30) = 600$
- 30. $0 \cdot (-16) = 0$

Solve.

- 31. There was a temperature change of -2°F each hour over a period of 5 hours. In all, what was the temperature change over the 5-hour period?
 -10°F
- 32. The price of a share of stock increased \$3 each week over a 7-week period. What was the total change in the price of a share of the stock over this period of time?
\$21



33. Find $-5 \cdot 3$.

- A -15
- B -2
- C 2
- D 15

Skill 6

34. Find $-8 + 20$.

- F -28
- G -12
- H 12
- J 28

Skill 4

SKILL 7: Division of Integers

Student pages 13-14

Name _____ Date _____ Class _____



SKILL 7: Division of Integers

In the previous lesson you learned the rules for deciding what sign to use when you multiply two integers. The rules for finding the quotient of two integers match the rules for finding the product.

Signs of Integers Answer is:
 Multiply Same sign \rightarrow +
 or
 Divide Different signs \rightarrow -

If the number you are dividing is 0, the quotient is 0. You cannot use 0 as a divisor.

Example

Divide.

- $18 \div (-6) = -3$ The integers have different signs, so the quotient is negative.
- $-40 \div (-5) = 8$ The integers have the same sign, so the quotient is positive.
- $0 \div (-4) = 0$ The number being divided is 0, so the quotient is 0.
- $-49 \div 7 = -7$ The integers have different signs, so the quotient is negative.

Guided Practice

Tell whether the quotient is positive, negative, or 0. Then divide.

- $-35 \div 7$
The integers have different signs.
The quotient is negative.
So, $-35 \div 7 = -5$.
- $100 \div (-2)$
The integers have different signs.
The quotient is negative.
So, $100 \div (-2) = -50$.
- $4 \cdot 0 \div (-8)$
The integer being divided is 0.
The quotient is 0.
So, $0 \div (-8) = 0$.

Name _____ Date _____ Class _____

SKILL 7: Practice

Tell whether the quotient is positive, negative, or 0. Then divide.

- $72 \div (-8)$ negative
 $72 \div (-8) = -9$
- $-45 \div (-9)$ positive
 $-45 \div (-9) = 5$
- $35 \div 5$ positive
 $35 \div 5 = 7$
- $0 \div 2 = 0$
- $-42 \div 7$ negative
 $-42 \div 7 = -6$
- $-36 \div (-6)$ positive
 $-36 \div (-6) = 6$
- $-8 \div (-4) = 2$
- $-20 \div 4 = -5$
- $-6 \div 2 = -3$
- $-12 \div 3 = -4$
- $-5 \div 5 = -1$
- $-18 \div 3 = -6$
- $-45 \div (-5) = 9$
- $-4 \div (-1) = 4$
- $-48 \div 6 = -8$
- $-6 \div (-2) = 3$
- $0 \div (-5) = 0$
- $12 \div (-6) = -2$
- $56 \div 8 = 7$
- $-35 \div (-7) = 5$
- $48 \div (-8) = -6$
- $72 \div (-8) = -9$
- $-45 \div (-9) = 5$
- $-35 \div 5 = -7$
- $-42 \div 7 = -6$
- $0 \div 2 = 0$
- $-36 \div (-6) = 6$
- $18 \div (-2) = -9$
- $-20 \div (-20) = 1$
- $0 \div (-16) = 0$

Solve.

- The total change in the price of a share of stock over a 5-day period was $-\$15$. If the price went down by the same amount each day, what was the change in price each day? $-\$3$
- Mario's weight increased by 18 pounds over 3 years. If the increase was the same each year, how much weight did Mario gain each year? 6 lb



- Find $-64 \div (-8)$.
A -8 C 6
B -6 D 8
- Find $6 - (-10)$.
H 4
J 16

Skill 5

Skill 7

Skill 4

Skill 8

SKILL 8: PROBLEM SOLVING: Operations with Integers

Student pages 15-16

Name _____ Date _____ Class _____



SKILL 8: PROBLEM SOLVING: Operations with Integers

Integers are often used to solve problems that involve increases and decreases, gains and losses, or other quantities that may be greater than or less than zero.

Example

A computer store lowered the price of a laptop computer \$45 each month. The store did this over a 6-month period. What was the change in price over this period of time?

Read The price of the laptop decreased by \$45 each month. This happened 6 different times.

Plan What integers describe the situation? The negative integer -45 can be used to represent a decrease of \$45. The positive integer 6 represents the number of times the price was lowered. Since the change represented by -45 occurred 6 times, multiply -45 by 6.

Solve Find $6 \cdot (-45)$. You are multiplying integers that have different signs, so the product will be negative.

$$6 \cdot (-45) = -270$$

There was a change of $-\$270$ in the price of the laptop computer.

Look Back Does your answer makes sense? The price changed by almost \$50 in each of 6 months. The number of dollars by which the price changed was almost \$300. Since \$270 is close to \$300, and since the change was a decrease, the answer, $-\$270$, makes sense.

Guided Practice

- A football team made a 15-yard gain on one play. On the next play, the team had an 8-yard loss. What was the total change? Was it an overall gain or loss?
 - The gain can be represented by the integer 15.
 - The loss can be represented by the integer -8.
 - The total change was 7 yards.
 - Since the total change is a positive integer, the team had an overall gain.

Name _____ Date _____ Class _____

SKILL 8: Practice

Use integers to solve each problem.

- In January, Doreen's bank balance decreased by \$50. In February, her balance increased by \$30. What was the total change in her balance? -\$20
- Mr. Schultz wanted to write a check for \$85. He noticed that he had only \$80 in his checking account. What integer shows what Mr. Schultz's checking account balance would have been if he had written the check? -\$5
- In golf, a score of 0 is called *even par*. One *over par* is represented by +1 and one *under par* is represented by -1. In a golf competition, a player had scores of +2, +1, -2, and 0. What was the player's total score? +1 or 1 over par
- Maria's score changes in a video game were +80, -90, and +40. What was the total change? +30
- The price of a share of stock dropped \$35 over a 5-day period. The change in price was the same on each of the 5 days. What was the change in price each day? -\$7
- On a test, the teacher gave +10 points for each correct answer, 0 points for a skipped question, and -5 points for each incorrect answer. There were 10 questions on the test. Alex had 8 correct answers and 2 incorrect answers. What score did Alex get? +70
- A mountain climber reached the top of a mountain that was 10,000 ft above sea level. After descending 3,400 ft, he rested for an hour. What was the level at which he rested? 6,600 ft
- In a science experiment, the temperature of a liquid dropped 30° over 6 hours. What integer shows the average hourly temperature change of the liquid? -5°



9. The temperature in Bensonville dropped 3°F each hour for 4 hours. What was the total temperature change over the 4-hour period? Skill 8

- (A) -12°F C 7°F
 B -7°F D 12°F

10. Find $-48 \div (-6)$.

- F 9 H -8
 (G) 8 J -9

Skill 7

SKILL 9: Order of Operations

Student pages 19-20

Name _____ Date _____ Class _____



SKILL 9: Order of Operations

To make sure everyone gets the same result when calculating the value of an expression, mathematicians use a set of rules known as the **order of operations**.

Order of Operations

1. Multiply and divide in order from left to right.
2. Add and subtract in order from left to right.

Example 1

Simplify: $20 + 3 \cdot (-4)$.

Follow the order of operations.

$$20 + 3 \cdot (-4)$$

↓

$$20 + (-12) = 8$$

So, $20 + 3 \cdot (-4) = 8$.

Multiply first.

Add.

Example 2

Simplify: $-48 \div 8 - 10 \cdot 9$.

Follow the order of operations.

$$-48 \div 8 - 10 \cdot 9$$

↓

$$-6 - 90 = -96$$

So, $-48 \div 8 - 10 \cdot 9 = -96$.

Divide: $-48 \div 8$. Multiply: $10 \cdot 9$.

Subtract.

Guided Practice

Simplify by completing each step.

1. Simplify: $72 \div 9 \cdot 4 + 5$.

$$= \frac{8}{9} \cdot 4 + 5$$

$$= \frac{32}{9} + 5$$

$$= \frac{37}{9}$$

2. Simplify: $7 + (-3) \cdot 2 - 8 \div 4$.

$$= 7 + \left(\frac{-6}{4}\right) - 8 \div 4$$

$$= 7 + \left(\frac{-6}{4}\right) - \frac{2}{1}$$

$$= \frac{1}{1} - \frac{2}{1}$$

$$= \frac{-1}{1}$$

Name _____ Date _____ Class _____

SKILL 9: Practice

Simplify.

1. $9 + 2 \cdot 3 = \underline{15}$

3. $7 - 24 \div 8 = \underline{4}$

5. $5 \cdot 3 + 5 \cdot 2 = \underline{25}$

7. $9 + 3 \cdot 6 - 4 = \underline{23}$

9. $10 - 3 \cdot 5 = \underline{-5}$

11. $-8 + 16 \div (-4) = \underline{-12}$

13. $17 - 9 \cdot 3 = \underline{-10}$

15. $8 + 3 \cdot 4 + 10 \div 5 = \underline{22}$

17. $3 \cdot 2 - 16 = \underline{-10}$

19. $3 + (-4) \cdot 6 = \underline{-21}$

21. $-2 + (-3) \cdot (-1) = \underline{1}$

23. $19 + -3 \cdot 4 - 2 \cdot 3 = \underline{1}$

2. $8 + 4 \cdot (-2) = \underline{0}$

4. $20 \div 2 - 24 \div 3 = \underline{2}$

6. $15 - 30 \div 5 = \underline{9}$

8. $-4 + 6 \cdot 7 = \underline{38}$

10. $12 - 3 \cdot 2 + 30 = \underline{36}$

12. $10 - 18 \div (-2) + 4 = \underline{23}$

14. $1 + 3 \cdot 2 \cdot 4 = \underline{25}$

16. $25 + 3 \cdot 6 + 2 = \underline{34}$

18. $1 - 8 \div 4 + 2 = \underline{0}$

20. $6 - 8 \div 2 - 10 = \underline{-8}$

22. $12 + 14 \div 7 = \underline{14}$

24. $20 \div 2 - 24 \div 3 = \underline{2}$

Solve.

25. The temperature was 78°F at 3 P.M. Each hour for the next 4 hours, the temperature decreased by 3°F . What was the temperature at 7 P.M.?

66°F

26. Max had a score of -700 points in a video game. On each of the next 3 plays, he gained 400 points. Then what was his score?

500



27. Simplify: $8 + 16 \div (-2)$.

A 16 C 0

B 12 D -12

28. Add: $23 + (-9)$.

F -14

G 14 H 24 J 32

Skill 4

Skill 9

SKILL 10: Translating Words to Algebraic Expressions

Name _____ Date _____ Class _____



SKILL 10: Translating Words to Algebraic Expressions

A variable is a letter or other symbol that stands for a number. An expression is made up of numbers, variables, and/or operation symbols. Some words can be translated into specific mathematical or algebraic expressions.

Word	Definition	Expressions
sum	The result of adding numbers	$7 + 2$ $8 + x$
difference	The result of subtracting numbers	$12 - 3$ $28 - y$
product	The result of multiplying numbers	4×16 $8c$ or $8 \cdot c$
quotient	The result of dividing numbers	$81 \div 9$ $\frac{14}{5}$ or $14 \div 5$

To translate situations that don't use these words, you need to choose an operation that is appropriate for the situation. It may be easier to choose an operation if you first replace the variable with a number.

Example

Write an expression to answer: What is the quotient of 99 divided by x ?

Step 1 What operation is being done? A quotient is the answer when dividing, so use division to write the expression.

Step 2 Use the appropriate operation sign to write the expression. $99 \div x$ or $\frac{99}{x}$

The expressions $99 \div x$ and $\frac{99}{x}$ show the quotient of 99 divided by x .

Guided Practice

Write an expression to answer each question.

- What is 12 minus r ?
 - What operation is being done? subtraction
 - Write the expression. $12 - r$
- What is g increased by 10?
 - What operation is being done? addition
 - Write the expression. $g + 10$
- What is 24 more than n ? $n + 24$
- What is 11 less than b ? $b - 11$
- What is d divided by 5? $d \div 5$ or $\frac{d}{5}$

Name _____

Date _____

Class _____

SKILL 10: Practice

Write the phrase as an expression.

- 12 more than x $x + 12$
- x less than 36 $36 - x$
- 2 times 23 $2 \cdot 23$
- 17 times s $17 \cdot s$ or $17s$
- b multiplied by 5 $b \cdot 5$ or $5b$
- y decreased by 10 $y - 10$
- 64 plus k $64 + k$
- u tripled $3 \cdot u$ or $3u$
- p divided by 8 $p \div 8$ or $\frac{p}{8}$
- 18 minus x $18 - x$
- 4 less than k $k - 4$
- z increased by 12 $z + 12$

Write an expression to answer each question.

- What is the product of 82 and g ? $82 \cdot g$ or $82g$
- What is the difference between n and 7? $n - 7$ or $7 - n$
- What is the quotient of 32 and x ? $32 \div x$ or $\frac{32}{x}$
- What is the sum of h and 7? $h + 7$
- Carolyn makes t batches of 12 cookies. How many cookies did she make? $12 \cdot t$ or $12t$
- A jar holds n ounces of jam. How many jars are needed for 100 ounces of jam? $100 \div n$ or $\frac{100}{n}$

Brian had p pencils. Then he bought 4 more. How many does he have now? $p + 4$

Tammy plants 6 rows of t tomato plants each. How many tomato plants did she plant? $6 \cdot t$ or $6t$



Which expression means d less than 17?

- A $d - 17$ C $d \div 17$
 B $17 - d$ D $17 \div d$

Skill 10

22. Simplify: $7 \cdot 6 - 7 \cdot 2$.

- F 70 H 28
 G 38 J -14

Skill 9

SKILL 11: Evaluating Algebraic Expressions

Student pages 23-24

Name _____ Date _____ Class _____



SKILL 11: Evaluating Algebraic Expressions

Expressions such as $-3n$, $x + 2$, and $6 - \square$ that contain variables are called **algebraic expressions**. The value of an algebraic expression depends on the value of each variable in the expression. You can **evaluate** expressions after replacing each variable with a value. This is known as *substituting* a value for the variable. An expression with numbers but without variables is called a **numerical expression**.

Example 1

Evaluate $7d$ for $d = 3$.

Replace d with 3. The expression becomes $7 \cdot 3$. Multiply: $7 \cdot 3 = 21$.
So, when you evaluate $7d$ for $d = 3$, the result is 21.

Example 2

Evaluate $3 + 2x$, for $x = -1$.

Replace x with 21. The expression becomes: $3 + 2(-1)$.

Use order of operations to simplify. Multiply first. $3 + \frac{1}{(-2)}$

Then add. 1

So, when you evaluate $3 + 2x$, for $x = -1$, the result is 1.

Guided Practice

Evaluate the expression by completing the steps.

- Evaluate $18 - x$ for $x = 7$.
 - Replace x with its value: $18 - 7$
 - Subtract: $18 - 7 = 11$
 - So, when you evaluate $18 - x$ for $x = 7$, the result is 11.
- Evaluate $3 + 4y$ for $y = -2$.
 - Remember that $4y$ means $4 \cdot y$. Replace y with its value: $3 + 4 \cdot (-2)$.
 - Use order of operations to simplify. $3 + (-8) = -5$.
 - So, when you evaluate $3 + 4y$ for $y = -2$, the result is -5.

© Prentice-Hall, Inc.

Name _____ Date _____ Class _____

SKILL 11: Practice

Evaluate each algebraic expression for the given value of the variable.

- $12 + x$ for $x = 4$ 16
- $20 - k$ for $k = 9$ 11
- $24 \div n$ for $n = 8$ 3
- $6t$ for $t = 2$ 12
- $32 - m$ for $m = -3$ 35
- $h + (-10)$ for $h = 2$ -8
- $-3j$ for $j = 9$ -27
- $p \div (-5)$ for $p = 35$ -7
- $26 + 2x$ for $x = 7$ 40
- $30 - 4y$ for $y = 8$ -2
- $20c \div 10$ for $c = 3$ 6
- $-3m$ for $m = -11$ 33
- $6 - 3f$ for $f = 6$ -12
- $2p - 14$ for $p = 13$ 12
- $-4 + 8t$ for $t = -5$ -44
- $100 \div j$ for $j = 5$ 20
- $3k - 8k$ for $k = 16$ -80
- $-3m + 15 - m$ for $m = 25$ -85
- $64g \div 8$ for $g = -7$ -56
- $200 + k + 9$ for $k = 63$ 207
- $2y + 8$ for $y = -3$ 2
- $18 - 3m$ for $m = -1$ 21
- $\frac{6}{2n}$ for $n = -3$ -1
- $9z + 2z$ for $z = -2$ -22

Solve.

- Mark drives $65t$ miles in t hours. How far does he drive in 2 hours? 130 mi
- Josefina spent $20 + 3b$ dollars on a pair of earrings and three blouses that cost b dollars each. How much did she spend in all if each blouse cost \$15? \$65



- Evaluate $9 + x$ for $x = -3$.
 - 27
 - 12
 - 6
 - 12
- Doug bought a book for d dollars and a poster for \$8. What expression represents how much he spent?
 - $8 + d$
 - $d + 8$
 - $8d$
 - $d + 8d$

Skill 11

Skill 10

© Prentice-Hall, Inc.

SKILL 12: Order of Operations with Parentheses

Name _____ Date _____ Class _____



SKILL 12: Order of Operations with Parentheses

When simplifying expressions containing parentheses, use the following order of operations:

1. Do operations inside parentheses.
2. Multiply and divide in order from left to right.
3. Add and subtract in order from left to right.

An expression in parentheses is often written beside a number, a variable, or another expression in parentheses. When no operation sign is written between the parentheses and the other part of the expression, the operation is multiplication.

Example 1

Simplify: $5(-16 + 10)$.

$$\begin{aligned} & 5(-16 + 10) \\ &= 5(-6) \\ &= -30 \end{aligned}$$

Do the operation inside the parentheses first.

Then multiply: $5(-6) = -30$.

So, $5(-16 + 10) = -30$.

Example 2

Simplify: $(1 + 2 \cdot 3)(4 - 6)$.

$$\begin{aligned} & (1 + 2 \cdot 3)(4 - 6) \\ &= (1 + 6)(-2) \\ &= 7(-2) \\ &= -14 \end{aligned}$$

Do the operations in parentheses.

Then multiply: $7(-2) = -14$.

So, $(1 + 2 \cdot 3)(4 - 6) = -14$.

Guided Practice

Simplify each expression.

$$\begin{aligned} 1. \quad & 6(24 - 14) = 6(\underline{10}) \\ &= \underline{60} \end{aligned}$$

$$\begin{aligned} 2. \quad & 5(7 - 3 \cdot 9) = 5(7 - \underline{27}) \\ &= 5(\underline{-20}) \\ &= \underline{-100} \end{aligned}$$

Name _____ Date _____ Class _____

SKILL 12: Practice

Simplify each expression.

1. $7(3 + 5) = \underline{56}$
2. $(16 + 4) \div 5 = \underline{4}$
3. $(-2)(3 + 8) = \underline{-22}$
4. $(-3 + 9) \div 2 = \underline{3}$
5. $(6 + 4)(2 + 3) = \underline{50}$
6. $3(2 \cdot 5 - 7) = \underline{9}$
7. $(12 \cdot 3 - 1) \div 5 = \underline{7}$
8. $(-8 - 22) \div 10 = \underline{-3}$
9. $(-2 + 6)(5 - 8) = \underline{-12}$
10. $(13 - 6)(13 - 7) = \underline{42}$
11. $(6 - 13)(7 - 13) = \underline{42}$
12. $18 \div (4 + 5) = \underline{2}$
13. $36 \div (2 - 8) = \underline{-6}$
14. $60(8 - 12 + 2) = \underline{-120}$
15. $48 \div (2 - 8 \cdot 1) = \underline{-8}$
16. $(-9)(15 - 5) = \underline{-90}$
17. $54 \div (7 - 13) = \underline{-9}$
18. $1 + (3 - 9) + 8 = \underline{3}$
19. $(14 + 10) \div (2 - 6) = \underline{-6}$
20. $(4 - 7)(2 + 9) = \underline{-33}$
21. $(7 - 6) + (2 - 3 \cdot 4) = \underline{-9}$
22. $9 \div (-2 - 1) = \underline{-3}$
23. $16 - (5 - 8) = \underline{19}$
24. $(2 \cdot 6 - 4) \div (4 - 8) = \underline{-2}$

Solve.

25. The high temperature on Monday was 78°F . The high temperature on Tuesday and Wednesday was 81°F . Evaluate $(78 + 2 \cdot 81) \div 3$ to find the average high temperature for the 3 days.

$\underline{80^\circ\text{F}}$

26. Harry made deposits of \$55 and \$35 in his bank account. He wrote checks for \$20 and \$35. Evaluate $(55 + 35) - (20 + 35)$ to find the change in his bank account balance.

$\underline{\$35}$



27. Evaluate: $2(8 - 12)$.

- A 8 C -4
B 4 D -8

Skill 12

28. Evaluate $7m$ for $m = -2$.

- (F) -14 H 5
G -5 J 14

Skill 11

SKILL 13: Solving 1-Step Equations

Student pages 27-28

Name _____ Date _____ Class _____



SKILL 13: Solving 1-Step Equations

To solve an equation, you "undo" operations until the variable is alone on one side of the equation. Remember that addition and subtraction undo each other, and multiplication and division undo each other. Also recall that you can use a fraction to show division. To check the solution, substitute the solution for the variable in the equation.

Example 1

Solve: $x + 7 = 18$.

$$x + 7 = 18$$

$$x + 7 - 7 = 18 - 7$$

$$x = 11$$

Check: $11 + 7 \stackrel{?}{=} 18$
 $18 = 18$

The solution is 11.

Example 2

Solve: $5x = -15$.

$$5x = -15$$

$$\frac{5x}{5} = \frac{-15}{5}$$

$$x = -3$$

Check: $5(-3) \stackrel{?}{=} -15$
 $-15 = -15$

The solution is -3.

Guided Practice

Solve each equation. Check your solution.

1. $x - 3 = 10$

$$x - 3 + 3 = 10 + 3$$

$$x = 13$$

Check:

$$\frac{13}{10} - 3 \stackrel{?}{=} 10$$

The solution is 13.

3. $\frac{x}{7} = 9$

$$\frac{x}{7} (\frac{7}{7}) = 9(\frac{7}{7})$$

$$x = 63$$

Check:

$$\frac{63}{7} \stackrel{?}{=} 9$$

The solution is 63.

2. $8x = -16$

$$\frac{8x}{8} = \frac{-16}{8}$$

$$x = -2$$

Check:

$$8(\frac{-2}{8}) \stackrel{?}{=} -16$$

The solution is -2.

Name _____ Date _____ Class _____

SKILL 13: Practice

Solve each equation.

1. $x + 6 = 14$

$$x = 8$$

4. $2x = 18$

$$x = 9$$

7. $m - 10 = -6$

$$m = 4$$

10. $n - (-8) = 15$

$$n = 7$$

13. $\frac{n}{-11} = 8$

$$n = -88$$

16. $x + 23 = 37$

$$x = 14$$

19. $\frac{k}{-6} = -12$

$$k = 72$$

22. $x - (-13) = 2$

$$x = -11$$

2. $x + 9 = 19$

$$x = 10$$

5. $\frac{r}{5} = 9$

$$r = 45$$

8. $\frac{k}{-8} = 6$

$$k = -48$$

11. $-4x = -60$

$$x = 15$$

14. $x + (-6) = 9$

$$x = 15$$

17. $x - 13 = -28$

$$x = -15$$

20. $12y = -84$

$$y = -7$$

23. $\frac{z}{3} = -14$

$$z = -42$$

3. $x - 3 = 7$

$$x = 10$$

6. $(-4)x = 20$

$$x = -5$$

9. $10x = -70$

$$x = -7$$

12. $8p = -96$

$$p = -12$$

15. $-7k = -63$

$$k = 9$$

18. $\frac{m}{-9} = 20$

$$m = -180$$

21. $m + (-15) = 30$

$$m = 45$$

24. $-8x = -168$

$$x = 21$$

Solve.

25. In a video game, Charles scored -250 points on his second play. This brought his total score to 500. What was his score on the first play? **750 points**

26. Each day for several days, the change in the price of a share of stock was -\$3. The total change in price during those days was -\$36. Over how many days did the price decline? **12 days**



27. What is the solution of $4x = -28$? **Skill 13**

A 24 C -24 D -32

B -7

28. Evaluate: $-4(9 + 5)$. **Skill 12**

F 56 G 41

H -41 **J** -56

SKILL 14: Solving 2-Step Equations

Name _____ Date _____ Class _____



SKILL 14: Solving 2-Step Equations

In some equations, more than one operation is used. To undo the operations, you reverse the original order of operations.

Example

Solve: $3x - 1 = -7$.

In the equation, x was first multiplied by 3 and then 1 was subtracted. To undo the operations, you work backward by first adding 1 and then dividing by 3.

Step 1 Add 1 to each side. $3x - 1 = -7$
 $3x - 1 + 1 = -7 + 1$

$$3x = -6$$

$$\frac{3x}{3} = \frac{-6}{3}$$

$$x = -2$$

Step 2 Divide by 3 on each side.

Check: $3(-2) - 1 \stackrel{?}{=} -7$
 $-6 - 1 \stackrel{?}{=} -7$
 $-7 = -7$

So, the solution is -2 .

Guided Practice

Solve each equation.

1. $\frac{x}{-3} + 5 = 9$
 $\frac{x}{-3} + 5 - 5 = 9 - 5$
 $\frac{x}{-3} = 4$
 $\frac{x}{-3} \cdot (-3) = 4 \cdot (-3)$
 $x = -12$

2. $5x - 7 = 3$
 $5x - 7 + 7 = 3 + 7$
 $5x = 10$
 $\frac{5x}{5} = \frac{10}{5}$
 $x = 2$

3. $2x + 1 = 13$
 $2x + 1 - 1 = 13 - 1$
 $2x = 12$
 $\frac{2x}{2} = \frac{12}{2}$
 $x = 6$

4. $\frac{x}{4} - 6 = 3$
 $\frac{x}{4} - 6 + 6 = 3 + 6$
 $\frac{x}{4} = 9$
 $\frac{x}{4} \cdot 4 = 9 \cdot 4$
 $x = 36$

Name _____ Date _____ Class _____

SKILL 14: Practice

To solve each equation, tell what you will do first to both sides.

1. $2x + 7 = 13$
 Subtract 7. Add 8.

2. $-3n - 8 = 7$
 Add 8.

3. $2x - 9 = 11$
 Add 9.

4. $-5x + 6 = 36$
 Subtract 6.

5. $10x + (-9) = 21$
 Subtract -9.

6. $4x - 13 = 3$
 Add 13.

7. $-5m + 12 = -9$
 Subtract 12.

8. $8k - 11 = 13$
 Add 11.

9. $-6n - (-2) = 8$
 Add -2.

Solve each equation. Check your solutions.

10. $3b + (-7) = -25$
 $b = -6$

12. $16 = 4h - 12$
 $h = 7$

13. $\frac{x}{6} - (-10) = 3$
 $x = -42$

14. $8w - 17 = -89$
 $w = -9$

15. $\frac{y}{7} - 12 = -4$
 $c = 56$

16. $\frac{p}{-5} + 12 = 20$
 $p = -40$

17. $5j + (-16) = -76$
 $j = -12$

18. $\frac{k}{-3} + (-8) = -8$
 $k = 0$

For each problem, write an equation. Then solve.

19. Linda had \$15 in her coin bank. On her birthday, 5 relatives sent her money as a birthday gift. Each relative sent the same amount. She then had \$115. How much money did Linda receive from each relative?

$\$15 + 5x = \115 ; $\$20$

20. Gorillas and chimpanzees can learn sign language to communicate with humans. By 1982, a gorilla named Koko had learned 700 words. This is 50 fewer than 5 times as many words as a chimpanzee named Washoe knew 10 years earlier. How many words did Washoe know?

$5x - 50 = 700$; 150 words



21. Solve: $4x - 8 = 32$.

- (A) 10
 B 8
 C 6
 D -6

Skill 14

22. Solve: $n + 15 = 22$.

- F -8
 G -7
 H 7
 J 17

Skill 13

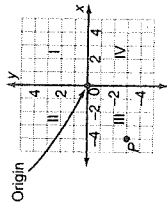
SKILL 15: The Coordinate Plane

Name _____ Date _____ Class _____



SKILL 15: The Coordinate Plane

The x - y coordinate plane is based on two number lines. The horizontal line is the x -axis, and the vertical line is the y -axis. They intersect at the zero point on each number line. This point is called the **origin**. The axes divide the plane into four **quadrants**.



Any point, P , can be described by an **ordered pair**. The first number, the **x -coordinate**, tells how far to the left (for a negative number) or to the right (for a positive number) of the origin the point is. The **y -coordinate** tells how far up (for a positive number) or down (for a negative number) the point is. The origin is at $(0, 0)$.

Example 1

What point is described by $(-3, 4)$?

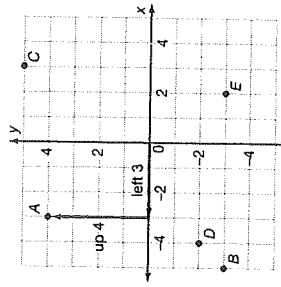
- $(-3, 4)$ \leftarrow Move left 3 units.
 $(-3, 4)$ \uparrow Move up 4 units.
 $(-3, 4)$ describes point A.

Example 2

Find the coordinates of point B.

Point B is located 5 units to the left of the origin $(-5$ on the x -axis) and 3 units down $(-3$ on the y -axis).

So, the coordinates of point B are $(-5, -3)$.



Guided Practice

Refer to the diagram to the right of Examples 1 and 2.

1. What point is described by $(-4, -2)$? 2. What are the coordinates of point C?

Start at the origin.

Move left 4 units, then move right 3 units, then

then move down 2 units. (up/down) (how many?)

You come to point D.

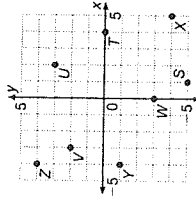
Start at the origin. To get to point C, move right 3 units, then move up 5 units. The coordinates of point C are (3, 5).

Name _____ Date _____ Class _____

SKILL 15: Practice

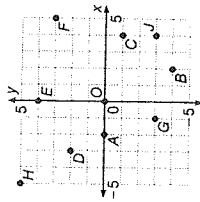
Find the coordinates of each point.

1. S (1, -5) 2. T (4, 0)
 3. U (2, 3) 4. V (-3, 2)
 5. W (0, -3) 6. X (5, -4)
 7. Y (-4, -1) 8. Z (-4, 4)



Name the point that has the given coordinates.

9. $(2, -4)$ B 10. $(0, 4)$ F
 11. $(-3, 2)$ D 12. $(0, 0)$ O
 13. $(-2, 0)$ A 14. $(-1, -3)$ G
 15. $(5, 3)$ F 16. $(4, -1)$ C
 17. $(-5, 5)$ H 18. $(4, -3)$ J



Solve.

19. A city with streets that run north/south and east/west uses coordinates to identify locations of buildings. The unit of length is 1 city block. How many blocks must a taxi driver travel to get from a bus stop at $(2, 5)$ to a house at $(17, 25)$?

35 blocks



20. What are the coordinates of a point in the coordinate plane that is 2 units to the right of the origin and 7 units down?

- A $(-2, -7)$ C $(2, -7)$
 B $(-2, 7)$ D $(2, 7)$

21. Solve: $6x + 5 = -13$.

- F -18 H 3
 G -3 J 18

Skill 14

Skill 15

SKILL 16: Defining and Comparing Rational Numbers

Name _____ Date _____ Class _____



SKILL 16: Defining and Comparing Rational Numbers

Rational numbers are numbers that can be written as a ratio of two integers. The denominator can not be zero. Some examples of rational numbers are $\frac{-2}{3}$, $\frac{5}{8}$, $\frac{12}{-7}$, and $\frac{47}{100}$.

Some numbers that at first might not look like rational numbers actually are rational numbers, because they can be written as equivalent fractions with numerators and denominators that are integers. For example, $-\frac{3}{5} = \frac{-3}{5}$, $1.25 = \frac{5}{4}$, and $-0.3 = \frac{-3}{10}$.

Example 1

Show that each number is a rational number by writing an equivalent fraction with a numerator and a denominator that are both integers.

a. $-4\frac{1}{6}$

$$-4\frac{1}{6} = -\frac{25}{6} = \frac{-25}{6}$$

So $-4\frac{1}{6}$ is a rational number.

b. -0.125

$$-0.125 = -\frac{125}{1,000} = \frac{-1}{8}$$

So -0.125 is a rational number.

You can compare rational numbers in much the same way as you compare fractions, decimals, and integers.

Example 2

Compare $-1\frac{3}{5}$ and $-2\frac{1}{2}$.

Write the rational numbers using the positive common denominator 10.

$$-1\frac{3}{5} = \frac{-8}{5} = \frac{-16}{10} \quad -2\frac{1}{2} = \frac{-5}{2} = \frac{-25}{10}$$

Compare the numerators. Since $-16 > -25$, you know that $\frac{-16}{10} > \frac{-25}{10}$.

$$\text{So, } -1\frac{3}{5} > -2\frac{1}{2}.$$

Guided Practice

1. Write 4.6 as a ratio of two integers.

$$4.6 = 4\frac{6}{10} = \frac{46}{10}$$

Every negative number is LESS (less/greater) than every positive number.

$$\text{So, } -1\frac{4}{5} < \frac{2}{3}.$$

Name _____

Date _____

Class _____

SKILL 16: Practice

Write each rational number as a ratio of two integers. Sample answers are given.

1. $-3\frac{3}{4}$

$$-\frac{15}{4}$$

3. -0.8

$$-\frac{4}{5}$$

4. $-\frac{5}{6}$

$$-\frac{5}{6}$$

6. $-\frac{34}{35}$

$$-\frac{34}{35}$$

7. 0.55

$$\frac{11}{20}$$

9. $8\frac{2}{3}$

$$\frac{26}{3}$$

Use $>$, $<$, or $=$ to compare the rational numbers.

10. $\frac{2}{3} > \frac{1}{4}$

11. $-\frac{2}{3} > -\frac{3}{4}$

12. $-5\frac{1}{2} < 7\frac{1}{2}$

13. $3\frac{1}{5} > -7\frac{2}{5}$

14. $-1\frac{1}{4} < -1\frac{1}{5}$

15. $-\frac{3}{4} < -\frac{3}{8}$

16. $-5.5 = -5\frac{1}{2}$

17. $\frac{2}{3} > \frac{19}{20}$

18. $-3\frac{7}{8} < -1\frac{5}{6}$

19. $\frac{4}{5} > -12\frac{3}{4}$

20. $0.7 > -0.9$

21. $0 < -0.3$

22. $-\frac{1}{3} = -0.3$

23. $\frac{17}{16} > \frac{17}{16}$

24. $0.6 = \frac{3}{5}$

25. $\frac{5}{8} > \frac{3}{32}$

26. $-\frac{16}{3} < -\frac{14}{3}$

27. $0.75 = \frac{3}{4}$

Solve.

28. On Monday, the temperature went down to -15°F at a weather station in Canada. On Tuesday, the temperature dropped to -19.5°F . Which day had the lower temperature?

Tuesday

29. Last year, Lucille grew 1.25 inches. Berta grew $1\frac{1}{3}$ inches. Which girl grew more?

Berta



30. Which number is greater than $-\frac{2}{3}$?

(A) $-\frac{1}{3}$

(C) $-\frac{4}{5}$

(B) $-\frac{3}{4}$

(D) -1

31. Find $-7 + 18$.

F -25

G -11

(H) 11

J 25

Skill 4

Skill 16

SKILL 17: Computing with Rational Numbers

Student pages 37–38

Name _____ Date _____ Class _____



SKILL 17: Computing with Rational Numbers

What you have learned about opposites and absolute value of integers applies to rational numbers also. (The opposite of $\frac{2}{3}$ is $-\frac{2}{3}$, the absolute value of $-\frac{3}{4}$ is $\frac{3}{4}$, and so on.) This means that you can add, subtract, multiply, and divide rational numbers in much the same way you did integers.

Example 1

$$\text{Add: } -\frac{3}{5} + \frac{1}{5}$$

Rewrite $-\frac{3}{5}$ as $\frac{-3}{5}$.

The denominators are the same. Add the numerators.

$$\frac{-3}{5} + \frac{1}{5} = \frac{-3+1}{5} = \frac{-2}{5}$$

So, $-\frac{3}{5} + \frac{1}{5} = \frac{-2}{5}$ or $-\frac{2}{5}$.

Example 2

$$\text{Multiply: } -\frac{2}{3} \cdot \left(-\frac{1}{5}\right)$$

Rewrite $-\frac{2}{3}$ as $\frac{-2}{3}$ and $-\frac{1}{5}$ as $\frac{-1}{5}$.

You are multiplying numbers with the same sign, so the answer will be positive.

Multiply the numerators.

$$\frac{-2}{3} \cdot \frac{-1}{5} = \frac{-2 \cdot (-1)}{3 \cdot 5} = \frac{2}{15}$$

Multiply the denominators.

$$\text{So, } -\frac{2}{3} \cdot \left(-\frac{1}{5}\right) = \frac{2}{15}$$

Guided Practice

1. Subtract: $1.5 - (-12.9)$. 2. Multiply: $7.5 \cdot (-9)$.

Change subtraction to addition,

$$7.5 \cdot 9 = \underline{67.5}$$

and add the opposite of $\underline{-12.9}$.

$$1.5 - (-12.9) = 1.5 + \underline{12.9}$$

the final answer will be **negative**.

(negative/positive)

$$\text{So, } 7.5 \cdot (-9) = \underline{-67.5}$$

$$\text{So, } 1.5 - (-12.9) = \underline{14.4}$$

3. Divide: $-1.5 \div 5$.

Since the numbers -1.5 and 5 have

different signs, the answer is **negative**.

(negative/positive)

$$1.5 \div 5 = \underline{0.3} \quad \text{So, } -1.5 \div 5 = \underline{0.3}$$

Name _____ Date _____ Class _____

SKILL 17: Practice

Add or subtract. Write fractions in simplest form.

1. $8.3 + (-4.1) = \underline{4.2}$ 2. $6 - 9.2 = \underline{-3.2}$ 3. $-7.69 - 14.8 = \underline{-22.49}$

4. $\frac{3}{5} + \frac{1}{5} = \underline{\frac{4}{5}}$ 5. $-\frac{15}{11} - \frac{7}{11} = \underline{-\frac{22}{11}}$ 6. $-\frac{1}{8} + \frac{3}{8} = \underline{\frac{2}{8}}$

7. $\frac{5}{12} - \frac{7}{12} = \underline{-\frac{2}{12}}$ 8. $-\frac{11}{15} + \frac{7}{15} = \underline{-\frac{4}{15}}$ 9. $-\frac{3}{4} - (-\frac{5}{4}) = \underline{\frac{2}{4}}$

10. $8\frac{1}{3} - 9\frac{2}{3} = \underline{-1\frac{1}{3}}$ 11. $4\frac{5}{6} - 2\frac{1}{6} = \underline{2\frac{4}{6}}$ 12. $\frac{5}{12} + (-\frac{7}{12}) = \underline{-\frac{2}{12}}$

Multiply or divide. Write fractions in simplest form.

13. $9.16 \cdot (-0.2) = \underline{-1.832}$ 14. $7.03 \cdot 0.04 = \underline{0.2812}$ 15. $-0.1 \cdot (-4.1) = \underline{0.41}$

16. $-8.64 \div 2 = \underline{-4.32}$ 17. $90.5 \div (-5) = \underline{-18.1}$ 18. $-6.4 \div (-0.8) = \underline{8}$

19. $\frac{1}{2} \cdot (-4) = \underline{-2}$ 20. $-\frac{2}{3} \cdot (-3) = \underline{2}$ 21. $-\frac{1}{2} \cdot \frac{3}{4} = \underline{-\frac{3}{8}}$

22. $\frac{1}{2} \div (-8) = \underline{-\frac{1}{16}}$ 23. $3\frac{1}{2} \div 7 = \underline{\frac{1}{2}}$ 24. $-7.5 \div 3 = \underline{-2.5}$

25. $-\frac{3}{8} \cdot (-\frac{5}{6}) = \underline{\frac{15}{48}}$ 26. $-\frac{3}{5} \div (-\frac{7}{8}) = \underline{\frac{24}{35}}$ 27. $\frac{4}{5} \cdot (-5) = \underline{-4}$

Solve.

28. The area of Colombia is about $1\frac{1}{4}$ times the area of Venezuela, which is about 352,000 square miles. What is the area of Colombia?

$$\underline{440,000 \text{ sq. mi}}$$

29. Miguel bought some stock priced at $14\frac{3}{8}$ per share. Find the value of the stock after it went up $2\frac{1}{4}$.

$$\underline{17\frac{1}{8}}$$



30. Add: $-\frac{2}{3} + \frac{1}{3}$.

Skill 17

A 1 B $\frac{1}{3}$ C $-\frac{1}{3}$ D -1

31. Which rational number is greater than $-\frac{3}{5}$?

F $-\frac{16}{20}$ H $-\frac{9}{15}$ Skill 16
G $-\frac{10}{15}$ J $-\frac{2}{15}$

SKILL 18: Solving Equations with Rational Numbers

Name _____ Date _____ Class _____

SKILL 18: Solving Equations with Rational Numbers

You can use the same procedures to solve equations with rational numbers that you used to solve equations with integers. You "undo" operations so that the variable is alone on one side of the equation.

Example 1

Solve: $\frac{2}{3}x = -\frac{1}{4}$

$$\frac{2}{3}x = \frac{-1}{4}$$

$$\frac{2}{3}x \div \frac{2}{3} = \frac{-1}{4} \div \frac{2}{3}$$

$$x = \frac{-1}{4} \cdot \frac{3}{2}$$

$$= \frac{-1 \cdot 3}{4 \cdot 2}$$

$$x = \frac{-3}{8}$$

The solution is $-\frac{3}{8}$.

Example 2

Solve: $\frac{x}{-0.4} = 6$.

$$\frac{x}{-0.4} = 6$$

x is divided by -0.4 .

Undo division by multiplication. Multiply both sides by -0.4 .

$$\frac{x}{-0.4} \cdot (-0.4) = 6 \cdot (-0.4)$$

$$x = -2.4$$

The solution is -2.4 .

Guided Practice

Solve each equation. Check your solution.

1. $m - 5 = -2$

5 is **subtracted** from m .
(added/subtracted)

Undo this operation by **addition**.
(addition/subtraction)

$$m - 5 + 5 = -2 + 5$$

$$x = \frac{41}{2}$$

2. $-0.6x = -6$
 x is multiplied by -0.6 .

Undo multiplication by **division**.

$$\frac{-0.6x}{-0.6} = \frac{-6}{-0.6}$$

$$x = 10$$

Name _____

Date _____

Class _____

SKILL 18: Practice

Solve each equation. Check your solution.

1. $x + \frac{5}{7} = \frac{6}{7}$

2. $x - \frac{1}{8} = -\frac{5}{8}$

3. $6m = -\frac{1}{2}$

4. $k + 4\frac{1}{2} = 3\frac{1}{2}$

5. $\frac{-n}{4} = \frac{1}{2}$

6. $y - \frac{5}{8} = -\frac{3}{8}$

7. $-3y = \frac{5}{8}$

8. $10x = -7$

9. $m + 9 = -11$

10. $t + (-1\frac{1}{2}) = -6\frac{1}{2}$

11. $j - (-4\frac{1}{3}) = -10$

12. $2k = \frac{1}{8}$

13. $x - 3.2 = -20.8$

14. $-0.25x = 2$

15. $\frac{5}{16}n = -10$

16. $-\frac{4}{5}m = 6$

17. $\frac{8}{9}t = -\frac{1}{3}$

18. $y + 1\frac{1}{4} = 7\frac{1}{4}$

19. $-\frac{1}{4}j = \frac{2}{3}$

20. $-0.01k = 0.8$

21. $-6t = 6.6$

22. $x = -17.6$

23. $x = -\frac{8}{9}$

24. $x = -\frac{71}{2}$

25. $t = -\frac{3}{8}$

26. $m = -\frac{22}{3}$

27. $k = -80$



24. Solve $2x = -8.4$.
A -16.8 C 4.2
B -4.2 D -42

25. Multiply: $-\frac{3}{4} \cdot (-\frac{2}{3})$.
F $\frac{1}{2}$ H $-\frac{1}{2}$
G $-\frac{5}{12}$ J $1\frac{1}{8}$

Skill 17

SKILL 19: Exponents and Square Roots

Student pages 41-42

Name _____ Date _____ Class _____



SKILL 19: Exponents and Square Roots

Remember that in exponential notation, the exponent tells you how many times the base is used as a factor.

$$3 \cdot 3 \cdot 3 \cdot 3 \cdot 3 = 3^5$$

5 factors 5 is the exponent.

3^5 is read as "3 to the fifth power."

Exponential form	Expanded form	Standard form
3^5	$3 \cdot 3 \cdot 3 \cdot 3 \cdot 3$	243
$(0.2)^3$	$0.2 \cdot 0.2 \cdot 0.2$	0.008
$(\frac{1}{5})^2$	$\frac{1}{5} \cdot \frac{1}{5}$	$\frac{1}{25}$

Example 1

Write $(-7)^3$ in standard and expanded forms.

$$(-7)^3 = (-7) \cdot (-7) \cdot (-7)$$

$$= 49 \cdot (-7)$$

$$= -343$$

In expanded form, $(-7)^3 = (-7) \cdot (-7) \cdot (-7)$.

In standard form, $(-7)^3 = -343$.

Powers of Negative Numbers

Suppose the base is negative. If the exponent is an even number, the standard form is positive. If the exponent is an odd number, the standard form is negative.

$$(-2)^3 = -8 \quad (-2)^4 = 16$$

$$(-2)^5 = -32 \quad (-2)^6 = 64$$

Finding the square root of a number is the inverse of squaring the number.

Squaring 5 : $5^2 = 25$ Square root of 25 : $\sqrt{25} = 5$.

You can see numbers and their squares in the table at the right. You can also use a calculator.

Example 2

Find the square root of 196.

From the table, you know $14^2 = 196$, so $\sqrt{196} = 14$.

n	n^2	n	n^2
1	1	11	121
2	4	12	144
3	9	13	169
4	16	14	196
5	25	15	225
6	36	16	256
7	49	17	289
8	64	18	324
9	81	19	361
10	100	20	400

Guided Practice

1. Write $(-3)^4$ in expanded and standard forms.

-3 is used as a factor 4 times.

Expanded form: $(-3) \cdot (-3) \cdot (-3) \cdot (-3)$.

The exponent is an even number.

The standard form for $(-3)^4$ is 81.

2. Find the square root of 324.

The number to the left of 324 in the table is 18.

$\sqrt{324} = \underline{18}$

Name _____ Date _____ Class _____

SKILL 19: Practice

Write using exponents.

1. $3 \cdot 3 \cdot 3 \cdot 3 \cdot 3 \cdot 3 \cdot 3$ 3^7

2. $10 \cdot 10 \cdot 10 \cdot 10 \cdot 10 \cdot 10 \cdot 10$ 10^7

3. $(-4) \cdot (-4) \cdot (-4) \cdot (-4) \cdot (-4)$ $(-4)^5$

4. $(-8) \cdot (-8) \cdot (-8) \cdot (-8)$ $(-8)^4$

5. $9 \cdot 9$ 9^2

6. $(-1) \cdot (-1) \cdot (-1) \cdot (-1)$ $(-1)^4$

Write in expanded form.

7. 1.9^4 $1.9 \cdot 1.9 \cdot 1.9 \cdot 1.9$

8. $(-0.6)^3$ $(-0.6) \cdot (-0.6) \cdot (-0.6)$

9. 20^5 $20 \cdot 20 \cdot 20 \cdot 20 \cdot 20$

10. $(-\frac{2}{3})^3$ $(-\frac{2}{3}) \cdot (-\frac{2}{3}) \cdot (-\frac{2}{3})$

11. 2^6 $2 \cdot 2 \cdot 2 \cdot 2 \cdot 2 \cdot 2$

12. $(-4)^4$ $(-4) \cdot (-4) \cdot (-4) \cdot (-4)$

Write in standard form.

13. 4^3 64

14. 5^4 625

16. 10^5 $100,000$

15. 10^2 100

19. 20^3 $8,000$

17. $(-2)^5$ -32

22. $(0.02)^3$ 0.000008

18. $(-3)^4$ 81

23. 45^2 $2,025$

21. 30^5 $24,300,000$

24. $(0.1)^4$ 0.0001

20. $(-1)^4$ 1

Find each square root.

25. $\sqrt{144}$ 12

26. $\sqrt{81}$ 9

28. $\sqrt{169}$ 13

27. $\sqrt{361}$ 19

29. $\sqrt{225}$ 15

30. $\sqrt{256}$ 16

Solve.

31. Suppose you toss a penny, a nickel, a dime, and a quarter at the same time and record the heads and tails. There are 2^4 ways the coins can land. Write this number in standard form. 16

32. Suppose you roll 3 dice of different colors and record what number you get for each color. There are 6^3 number combinations possible. Write this number in standard form. 216



33. What is $(-2)^4$ in standard form? 16

Skill 19

- A -8 C 8
B -16 D 16

34. Solve: $x + 2.5 = 1.5$.

Skill 18

- F -4 H 4
G -1 J 3

SKILL 20: Evaluating Expressions with Exponents

Name _____ Date _____ Class _____

SKILL 20: Evaluating Expressions with Exponents

To evaluate expressions with exponents, it is necessary to extend the order of operations rules to include exponents.

- Do operations inside parentheses.
- Evaluate terms with exponents.
- Multiply and divide from left to right.
- Finally, do all additions and subtractions from left to right.

To evaluate an expression that contains variables, first replace each variable in the expression with its value. Then use the order of operations.

Example 1

$$\begin{aligned} \text{Evaluate } 1 + 7(-3 + 5)^2. \\ 1 + 7(-3 + 5)^2 &= 1 + 7 \cdot (2)^2 \\ &= 1 + 7 \cdot (4) \\ &= 1 + 28 \\ &= 29 \end{aligned}$$

Do the operations within parentheses. Evaluate 2^2 . Multiply. Add. So, $1 + 7(-3 + 5)^2 = 29$.

Example 2

Evaluate $x^2 + 15$ for $x = 5$.

$$\begin{aligned} x^2 + 15 &= 5^2 + 15 \\ &= 25 + 15 \\ &= 40 \end{aligned}$$

Replace the variable with its value. Evaluate 5^2 . Add. For $x = 5$, the value of $x^2 + 15$ is 40.

Guided Practice

- Evaluate $1 + 2^3 \cdot (7 - 13)$.

$$\begin{aligned} 1 + 2^3 \cdot (7 - 13) &= 1 + 2^3 \cdot (-6) \\ &= 1 + 8 \cdot (-6) \\ &= 1 + (-48) \\ &= -47 \end{aligned}$$

For $x = -2$, the value of $5x^2 + 1$ is 21.

$$\begin{aligned} 5x^2 + 1 &= 5 \cdot (-2)^2 + 1 \\ &= 5 \cdot (4) + 1 \\ &= 20 + 1 \\ &= 21 \end{aligned}$$

Name _____ Date _____ Class _____

SKILL 20: Practice

Evaluate each expression.

- $(4 + 6)^3 = \underline{1,000}$
- $(-8 + 5)^2 = \underline{9}$
- $4 + 6^3 = \underline{220}$
- $4 + 5^3 = \underline{126}$
- $40 + 3 \cdot 2^2 = \underline{52}$
- $16 - 7 \cdot 2^3 = \underline{-40}$
- $(12 - 5)^3 = \underline{343}$
- $(16 - 7) \cdot 2^3 = \underline{72}$
- $(2 + 3)^2 - 7 = \underline{18}$
- $(16 - 7 \cdot 2)^3 = \underline{8}$
- $48 + (-2)^3 = \underline{40}$
- $(2^3 + 4^2) \div 4 = \underline{6}$
- $(1 + 6)^2 \cdot 3 = \underline{147}$
- $2^3 + 4^2 \div 4 = \underline{12}$
- $(3 + 3^2) \div 3 = \underline{4}$
- $2^5 - 1 = \underline{31}$

Evaluate each expression. Use the given value for each variable.

- $41 + m^2$ for $m = 3$ 50
- $(17 - k)^3$ for $k = 12$ 125
- $(x + 4)^2$ for $x = 8$ 144
- $(5 + 2n)^5$ for $n = -2$ 1

Solve.

- A company plans to assign a 5-digit ID number to each employee. The first digit will never be 0. The expression $9 \cdot 10^4$ represents the number of possible ID numbers. How many ID numbers are possible? 90,000
- If you have two dice of different colors, there are $6^2 - 6$ ways to roll two different numbers. In how many ways can you roll two different numbers? 30

24. What is the standard form for $(-2)^{19}$? (G) -8

Practice-Hill, Inc.

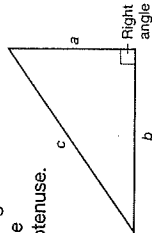
SKILL 21: The Pythagorean Theorem

Name _____ Date _____ Class _____



SKILL 21: The Pythagorean Theorem

The hypotenuse of a right triangle is the side opposite the right angle and is the longest side. The other two sides are called legs. In the triangle at the right, sides a and b are the legs. Side c is the hypotenuse.

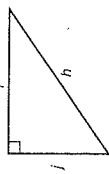


The Pythagorean Theorem states that the sum of the squares of the lengths of the legs of a right triangle is equal to the square of the length of the hypotenuse. This can be written algebraically as $a^2 + b^2 = c^2$.

Example 1

Name the hypotenuse and legs of the right triangle.

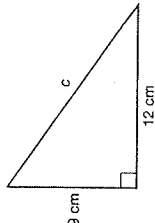
Side h is opposite the right angle, so it is the hypotenuse. Sides i and j are the legs.



Example 2

Find the length of side c .

Use the Pythagorean Theorem.
 Substitute 9 for a and 12 for b .
 Square 9 and 12.
 Add.
 Find $\sqrt{225}$.
 The length of the hypotenuse is 15 cm.



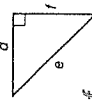
Guided Practice

1. Name the hypotenuse and legs of the right triangle.

a. The side opposite the right angle is side e .

So, the hypotenuse is side e .

b. The legs of the right triangle are sides d and f .



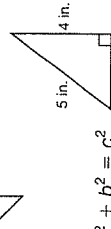
2. Find the missing length in the right triangle.

Use the Pythagorean Theorem.

Substitute 4 for b and 5 for c .

Replace each squared number with its value.

Undo the addition. Subtract 16 from both sides.



$$a^2 + b^2 = c^2$$

$$a^2 + \frac{4^2}{4^2} = \frac{5^2}{4^2}$$

$$a^2 + 16 = 25$$

$$a^2 + 16 - 16 = 25 - 16$$

$$a^2 = 9$$

$$\sqrt{9} = \frac{3}{3}$$

$$a = 3$$

To find a , find the square root of 9.

The missing length is 3 in.

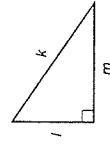
Name _____

Date _____

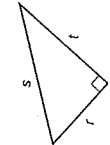
Class _____

SKILL 21: Practice

Name the hypotenuse and legs of each right triangle.

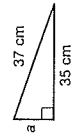


Hypotenuse: k
 Legs: l and m

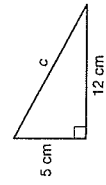


Hypotenuse: s
 Legs: r and t

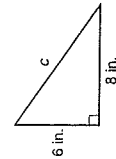
Find the missing length in each right triangle.



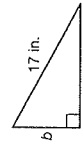
$a = 12$ cm



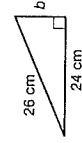
$c = 13$ cm



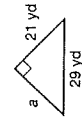
$c = 10$ in.



$b = 8$ in.

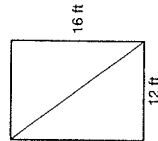


$b = 10$ cm



$a = 20$ yd

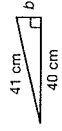
9. A courtyard that is 12 feet by 16 feet has a diagonal walkway. What is the length of the walkway?



20 ft



10. What is the length of side b of the right triangle?



A 1 cm

B 7 cm

C 9 cm

D 11 cm

Skill 21

Skill 20

F 60

G 20

H 68

J 144