



SKILL 14: Area of Circles

The circumference and the diameter of a circle are related by the number π . The radius and the area of a circle are also related by the number π . If you know the radius of a circle, you can use π to find the area.

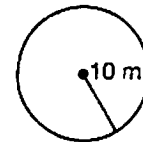
Area = $\pi \times r^2$, where r is the radius.

Example 1

Find the area of this circle. Use 3.14 for π .

Use the formula $A = \pi \times r^2$.

Substitute 10 for r , the radius, and 3.14 for π .



$$3.14 \times 10^2 = 3.14 \times 100 = 314$$

The area is 314 square meters, or 314 m².

Example 2

Given the area of a circle, find its radius.

$$A = 200.96 \text{ m}^2$$

Use the formula $A = \pi \times r^2$.

Substitute 200.96 for the area, A , and 3.14 for π .

$$200.96 = 3.14 \times r^2$$

$$\frac{200.96}{3.14} = r^2$$

$$64 = r^2$$

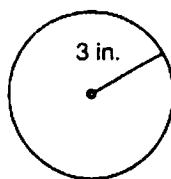
$$8 = r$$

The radius is 8 m.

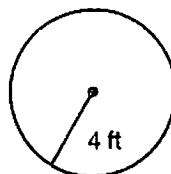
Guided Practice

Find the area of each circle. Use 3.14 for π .

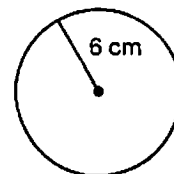
1.



2.



3.



Given the area of a circle, find its radius or diameter. Use 3.14 for π .

4. $A = 153.86 \text{ in}^2$

5. $A = 452.16 \text{ m}^2$

Think: $r^2 = 153.86 \div 3.14 =$ _____

Think: $r^2 = 452.16 \div 3.14 =$ _____

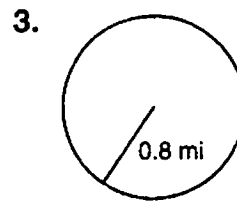
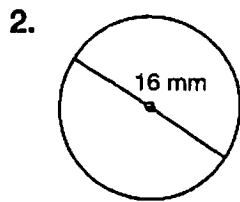
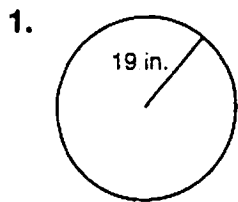
$r =$ _____ in.

$r =$ _____ m;

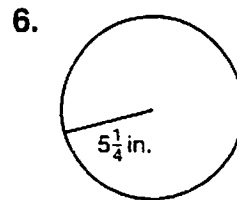
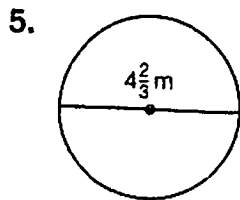
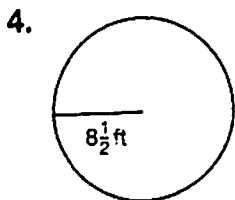
$d =$ _____ m

SKILL 14: Practice

Find the area of each circle given its diameter or radius. Use 3.14 for π .



Find the area of each circle given its diameter or radius. Use $\pi \approx \frac{22}{7}$. Express answers in simplest form.



Given the area of a circle, find its radius or diameter. Use $\pi \approx 3.14$. Round answers to the nearest tenth.

7. $A \approx 31,400 \text{ in}^2$

$r \approx$ _____

8. $A \approx 113.04 \text{ cm}^2$

$d \approx$ _____

9. $A \approx 379.94 \text{ mi}^2$

$r \approx$ _____

Solve. Round answers to the nearest tenth.

10. Find the area of a pizza if the diameter is 15 in.

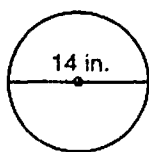
11. The radius of a U.S. quarter is about 12 mm. Find the area of a quarter.



12. The diameter of a pizza is 14 in. Find the area of the pizza rounded to the nearest tenth.

Skill 14

- A 21.9 in^2
- B 43.9 in^2
- C 153.9 in^2
- D 615.4 in^2



13. Which parallelogram has the greatest area?

Skill 10

- F $h = 3.4 \text{ m}, b = 2.8 \text{ m}$
- G $h = 2.8 \text{ m}, b = 3.4 \text{ m}$
- H $h = 4 \text{ m}, b = 3 \text{ m}$
- J $h = 5 \text{ m}, b = 2 \text{ m}$