



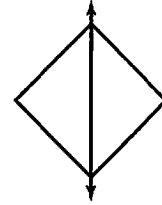
SKILL 12: Line Symmetry

A figure has **line symmetry** if it can be folded so that the two halves coincide exactly. The fold line is called the **line of symmetry**, and the two halves are congruent.

Example 1

Tell if the line is a line of symmetry.

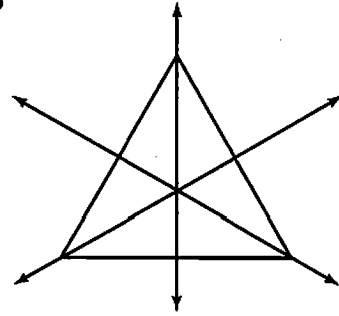
If the figure is folded on the line, the two parts would match exactly. So, the line is a line of symmetry.



Example 2

How many lines of symmetry does the figure have?

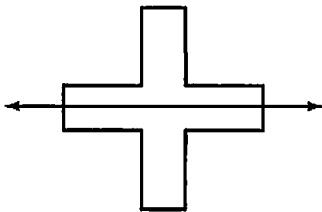
Find every line that produces two congruent halves that are mirror images of each other. The figure has 3 lines of symmetry.



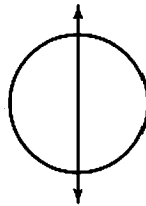
Guided Practice

Tell if each line is a line of symmetry. Write yes or no.

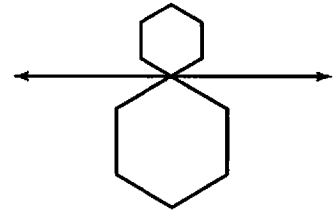
1.



2.

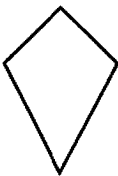


3.



How many lines of symmetry does each figure have? Draw the lines.

4.



5.

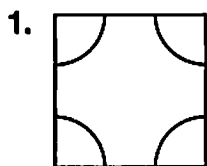


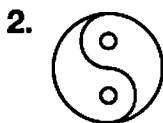
6.





SKILL 12: Practice

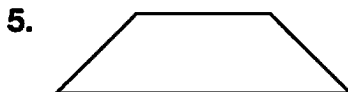
Tell whether the figure has line symmetry. If so, how many lines of symmetry does it have?

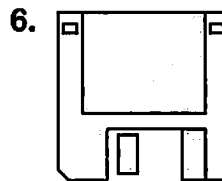








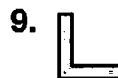




Tell how many lines of symmetry each figure has.








Tell how many lines of symmetry each flag has.

10. Sweden



11. Japan



12. Trinidad and Tobago





13. How many lines of symmetry does a regular pentagon have?

A 1

C 6

B 5

D 8

Skill 12

14. How many diagonals does a 20-sided polygon have?

F 200

H 80

G 170

J 40

Skill 5