

Where Do Airline Pilots Keep Their Uniforms?

✈ For each exercise, write the letter of the answer in the box containing the exercise number.

In Exercises 1-6, match the inequality with its graph.

1 $x < 1$

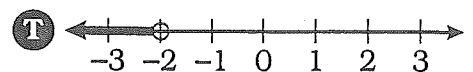
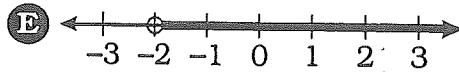
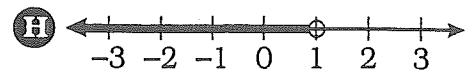
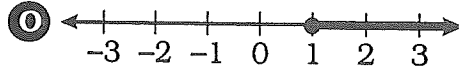
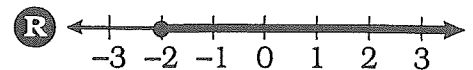
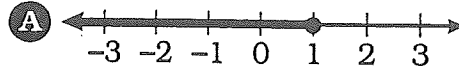
2 $x \leq 1$

3 $x > -2$

4 $x \geq -2$

5 $-2 > x$

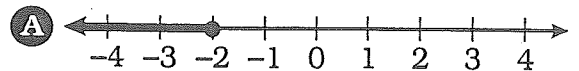
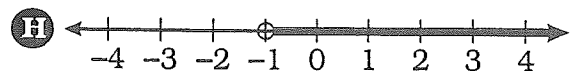
6 $1 \leq x$



In Exercises 7-18, solve the inequality. Then graph the solution.

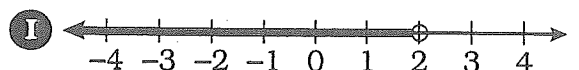
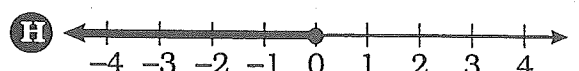
7 $4n + 1 < 9$

8 $7a - 2 \geq 5$



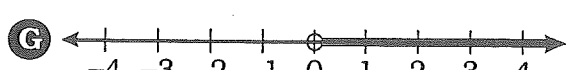

9 $3y + 10 \leq 4$

10 $8k - 3 > -27$



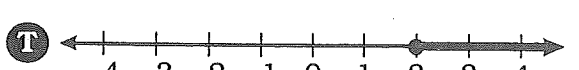

11 $\frac{x}{2} + 9 < 11$

12 $\frac{d}{6} - 4 \geq -5$



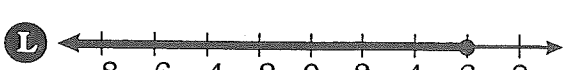
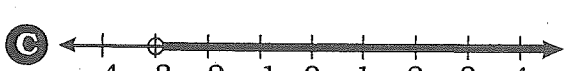
13 $\frac{u}{15} - 2 \leq -2$

14 $5p - 14 < 26$



15 $18 \leq 7b + 4$

16 $-9 < 12y + 3$



17 $-14 \geq \frac{x}{3} - 16$

18 $5 < \frac{m}{8} + 5$



7	11	5	13	3	10	17	6	15	1	8	12	16	2	14	18	9	4
---	----	---	----	---	----	----	---	----	---	---	----	----	---	----	----	---	---