

Warm Up

3/13

The special events club ordered a bunch of pizza for their year end party. They ordered 7 large pizzas and 2 medium pizzas and got 100 total slices.

The softball team ordered 5 large and 6 medium for a total of 108 slices.

How many slices are there in each size pizza?



Let x = # of slices in large pizza

Let y = # of slices in a medium pizza

$$\begin{array}{l} 3 \left[\begin{array}{l} 7x + 2y = 100 \\ 5x + 6y = 108 \end{array} \right] \longrightarrow \begin{array}{r} 21x + 6y = 300 \\ - \quad 5x + 6y = 108 \\ \hline 16x = 192 \\ 16 \quad 16 \\ \hline x = 12 \end{array} \end{array}$$

$$\begin{array}{l} 5x + 6y = 108 \\ 5(12) + 6y = 108 \\ 60 + 6y = 108 \\ -60 \quad -60 \\ \hline 6y = 48 \\ \underline{6} \quad \underline{6} \\ y = 8 \end{array}$$

12 slices in a Lg. Pizza
8 slices in a med. Pizza

3. A 100-foot cable is cut into two pieces. The first piece is 18 ft longer than the second. How long is each piece?

4. Three apples and four bananas cost \$4.85. Three apples and ten bananas cost \$8.75. Find the cost of an apple.

5. Stilt scored 5 points less than twice the number scored by Dunk. Together they scored a total of 43 points. How many points were scored by each player?

6. Bert's age plus twice Ernie's age is 30. Three times Bert's age plus 8 times Ernie's age is 108. How old are Bert and Ernie?

7. The Rocket Coaster has 15 cars, some that hold 4 people and some that hold 6 people. There is room for 72 people altogether. How many 4-passenger cars are there? How many 6-passenger cars are there?

8. Tickets to the Valentine Dance cost \$3 per person or \$5 per couple. If \$475 worth of tickets were sold and 180 people attended the dance, how many couples were there?

Let x = # of single tickets sold

Let y = # of couple tickets sold

$$x + 2y = 180$$

$$3x + 5y = 475$$

9. Pi High School ordered 40 science books. The next week, the school ordered 30 algebra books. The bill for the first order was \$360 greater than the bill for the second order. The two bills together totaled \$3960. Find the price of an algebra book.

Classwork

Solving Systems of Equations Review

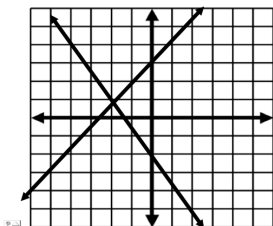
Name: _____

1. Which is the solution to the following system of equations?

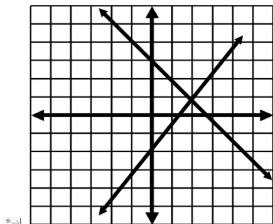
$$y = \frac{3}{2}x - 2$$

$$y = -x + 3$$

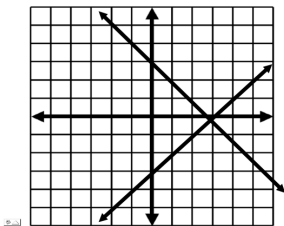
A)



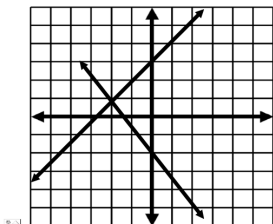
B)



C)



D)



E) None of the above

2. Solve the system using substitution.

$$x + 2y = -1$$

$$y = -3x - 8$$

- A) (2, -1)
- B) (-3, -1)
- C) (2, -2)
- D) (-3, -17)
- E) None of the above

3. The equations of two lines are: $4x + y = 10$
 $3x - 2y = 13$

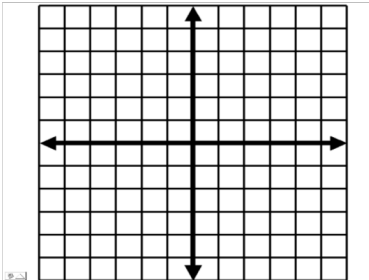
What is the intersection of these two lines?

- A) (2, 3)
- B) (3, -2)
- C) (-1, 14)
- D) (3, -6)
- E) None of the above

4. Graph the given system and determine which best describes the number of solutions it has.

$$y = 2x + 1$$

$$y = \frac{3}{2}x$$



- A) No solutions
- B) infinite solutions
- C) 1 solution
- D) 2 solutions

5. Which might be your first step if you want to solve the system by elimination?

1st equation: $5x + 4y = 7$

2nd equation: $2x - 3y = 3$

- A) Substitute $-10y + 7$ for x in the second equation.
- B) Substitute $3y + 3$ for x in the second equation.
- C) Multiply the first equation by 3, multiply the second equation by 4, then add the resulting equations together.
- D) Multiply the first equation by 2, multiply the second equation 5, then add the resulting equations together.

6. Which is the solution for the system below.

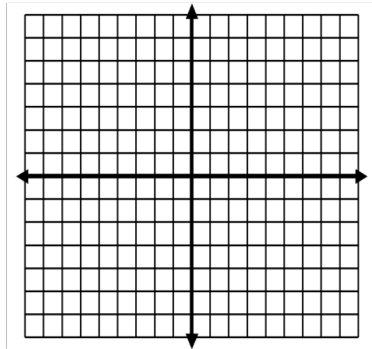
$$x = -4y + 10$$

$$x = 2y - 14$$

7. Graph and determine which is the solution.

$$y = \frac{1}{4}x - 4$$

$$2x - 8y = 8$$



- A) (0, -4) B) (-4, 0) C) No solution D) Infinite Solutions

- A) (-6, 4)
- B) (4, -6)
- C) (6, -2)
- D) (-2, 6)
- E) None of the above

9. Which is the solution to the system shown below.

$$-3x + 2y = 17$$

$$3x - 7y = -37$$

8. Solve the given system.

$$4x - 5y = 40$$

$$x = 3y + 24$$

- A) (0, 8)
- B) (8, 0)
- C) (-8, 0)
- D) (0, -8)
- E) None of the above

- A) (4,-3)
- B) (-3, 4)
- C) (-3, -4)
- D) (-4, -3)
- E) None of the above

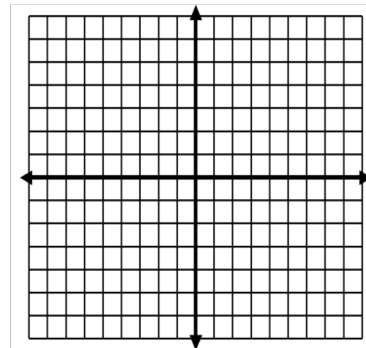
10. Solve using Substitution

$$4x = -8y + 20$$
$$y = -2x + 7$$

11. Graph the given system and determine which is the solution.

$$y = -\frac{1}{2}x + 2$$

$$y = -\frac{3}{2}x - 2$$



- A) (1, 2)
- B) (2, 1)
- C) (-4, 4)
- D) (4, -4)
- E) None of the above

12. Solve the given systems

$$5x - 10y = 7$$
$$x - 2y = 3$$

- A) No Solution
- B) Infinite Solutions
- C) (5, 0)
- D) (1, 2)

13. Which would be a good first step to use to solve this system?

1st equation: $y = 6x + 4$

2nd equation: $5x + 2y = 12$

- A) Multiply the first equation by 2, and add the result to the second equation.
- B) Substitute $5x + 12$ for y in first equation.
- C) Substitute $6x + 4$ for x in the second equation.
- D) Substitute $6x + 4$ for y in the second equation.

14. Solve using Elimination

$$3x - 3y = -9$$
$$-4x + 5y = 8$$

15. Solve the given system.

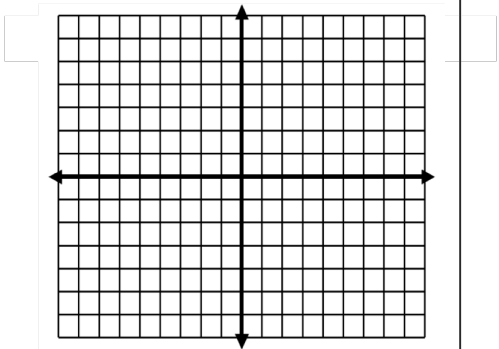
$$3y = -4x - 22$$
$$y = -5x - 11$$

- A) (1, 16)
- B) (16, 1)
- C) (-6, -1)
- D) (-1, -6)
- E) none of the above

16. Solve by graphing

$$5x + 2y = 4$$

$$4x - 4y = 20$$



Solution: _____

17. Solve the given system.

$$3x + 7y = 5$$

$$5x + 2y = -11$$

- A) (-2, -3)
- B) (-3, -2)
- C) (3, -5)
- D) (-5, 3)
- E) none of the above

18. How many solutions does the given system have?

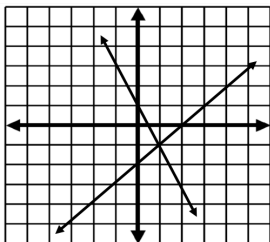
$$y = 3x - 1$$

$$6x - 2y = 2$$

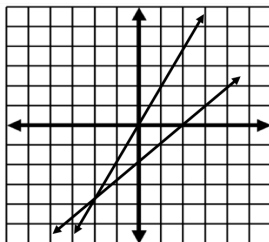
- A) one solution
- B) two solutions
- C) infinite solutions
- D) no solution

19. Which two lines represent the solution for the given system: $2x - y = 0$
 $y = x - 2$

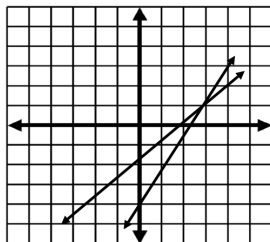
A)



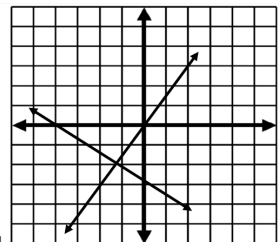
B)



C)



D)



20. Solve the given system.

$$4x - 4y = 20$$

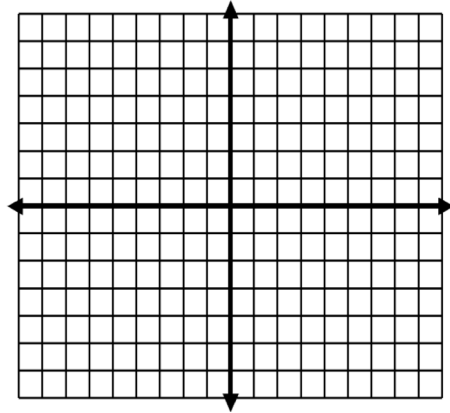
$$3x - 4y = 15$$

- A) (5, 0)
- B) (-4, 7)
- C) (5, 10)
- D) (-4, 4)
- E) none of the above

21. Solve by graphing:

$$y = -\frac{3}{4}x + 6$$

$$y = 2x - 5$$

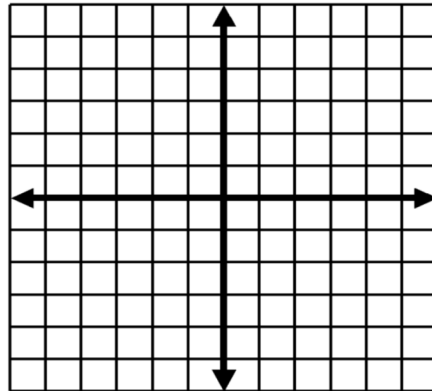


Solution

22. A) Graph the given system of equations and **explain** what your answer means.

$$6x + 3y = -9$$

$$2x + y = -3$$



B) Solve your system mathematically and explain **how you got your answer**.

Solve the following systems of equations. Don't forget to define variables! Feel free to use extra paper if needed.

1. The senior classes at High School A and High School B planned separate trips to the indoor climbing gym. The senior class at High School A rented and filled 3 vans and 13 buses with 612 students. High School B rented and filled 3 vans and 6 buses with 297 students. Each van and each bus carried the same number of students. Find the number of students in each van and in each bus
2. Alberto and Ryan each improved their yards by planting hostas and geraniums. They bought their supplies from the same store. Alberto spent \$13 on 2 hostas and 1 geranium. Ryan spent \$83 on 10 hostas and 7 geraniums. Find the cost of one hosta and the cost of one geranium.
3. Shawna and Mark each improved their yards by planting rose bushes and ornamental grass. They bought their supplies from the same store. Shawna spent \$16 on 1 rose bush and 6 bunches of ornamental grass. Mark spent \$36 on 4 rose bushes and 10 bunches of ornamental grass. What is the cost of one rose bush and the cost of one bunch of ornamental grass?
4. Jack and Shanice are selling flower bulbs for a school fundraiser. Customers can buy bags of windflower bulbs and packages of crocus bulbs. Jack sold 4 bags of windflower bulbs and 10 packages of crocus bulbs for a total of \$166. Shanice sold 13 bags of windflower bulbs and 2 packages of crocus bulbs for a total of \$82. Find the cost each of one bag of windflower bulbs and one package of crocus bulbs.

Homework

Do 20 more minutes.